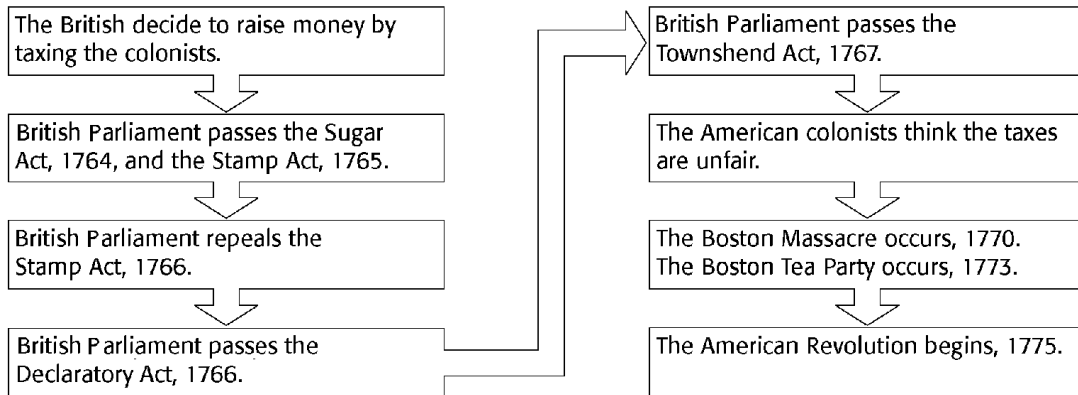


Road to Revolution DBQ's (Document Based Questions)

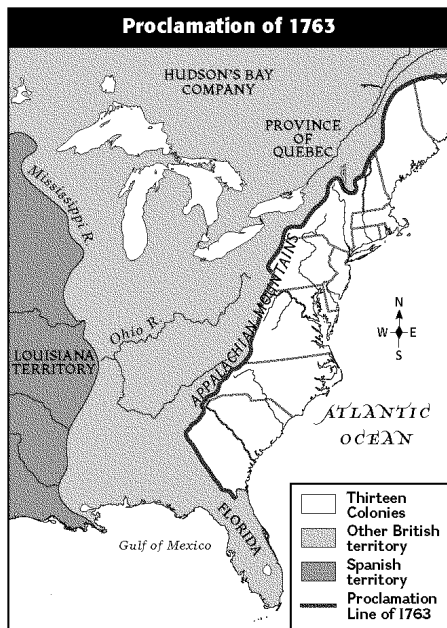
Name _____

Date _____ Class _____

Taxes: One of the Causes of the American Revolution



1. Why did the British pass the acts shown in the flowchart?
2. Which act was passed first?
3. What was the final result of the British trying to raise taxes?
4. Which act was passed last?
5. How many years elapsed from the Sugar Act to the American Revolution?
6. Why were the colonists so angry over these taxes?



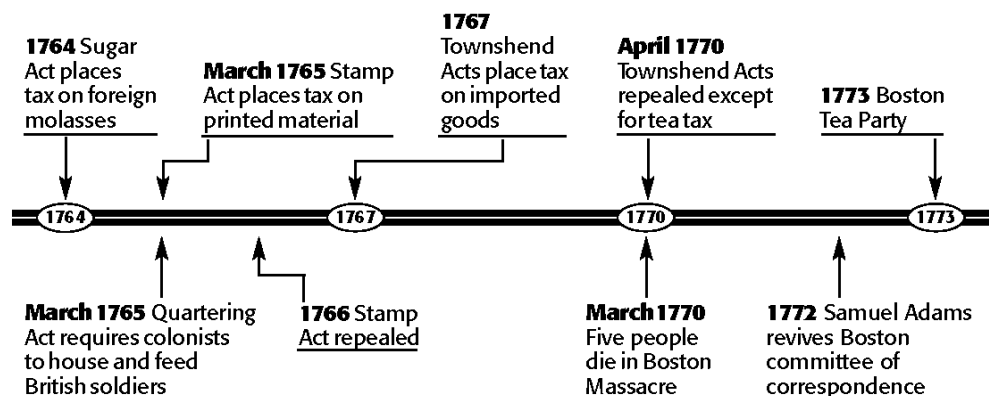
7. Based on the map, the Louisiana Territory belonged to what country in 1763?

Road to Revolution DBQ's (Document Based Questions)

Name _____

Date _____ Class _____

Taxes and Boycotts



8. Based on the time line above, how many people died in the Boston Massacre?

- a. 0
- b. 5
- c. 10
- d. 15

Paul Revere's Silver Business				
Silver Objects	Period A 1761-1775		Period B 1779-1797	
	Number	Percent	Number	Percent
Flatware	410	35.8	2,069	49.15
Tea and Coffee Wares	61	5.3	198	4.7
Tablewares	129	11.3	177	4.2
Personal Items	449	39.2	623	14.8
Harness Fittings	0	0.0	1,044	24.8
Miscellaneous	96	8.4	99	2.35
Total Objects	1,145	100.0	4,210	100.0

9. Based on the table, what did Paul Revere's silver business produce in Period B that it did not produce in Period A?

- a. flatware
- b. tablewares
- c. harness fittings
- d. miscellaneous

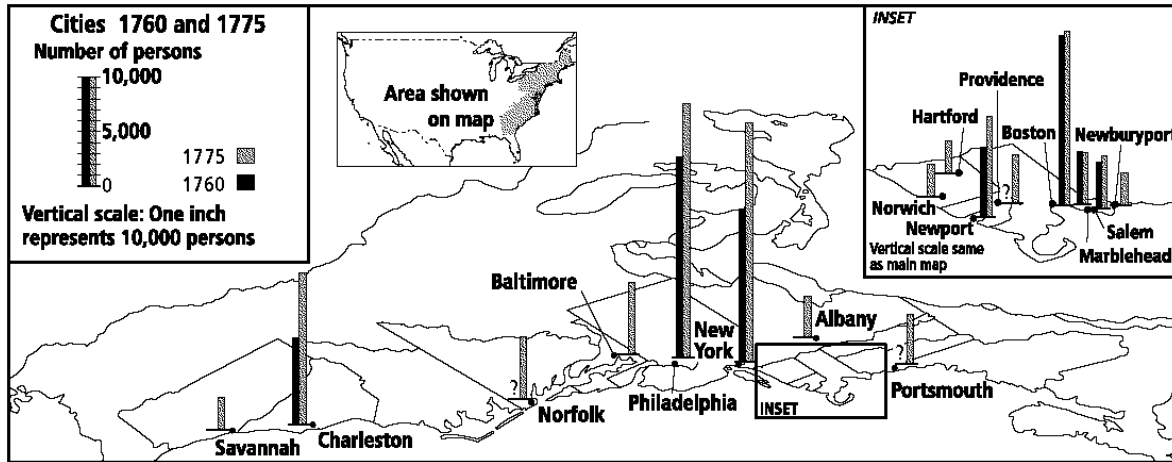
10. Based on the table, about five times more of one thing was produced in Period B than in Period A. What was it?

- a. flatware
- b. tablewares
- c. personal items
- d. harness fittings

Road to Revolution DBQ's (Document Based Questions)

Name _____

Date _____ Class _____

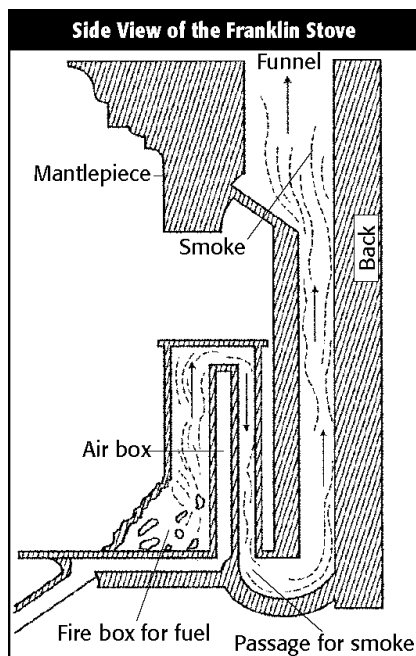


11. Which answer would be the best title for this map?

- a. Colonial Imports and Exports, 1760–1775
- b. Population of Colonial Cities, 1750 and 1765
- c. Population of Colonial Cities, 1760 and 1775
- d. Population of British Colonies

12. According to the map, Philadelphia had a higher population than New York City in ____.

- a. 1760
- b. 1775
- c. both 1760 and 1775
- d. neither 1760 nor 1775



13. In what part of a Franklin stove was fuel burned?

- a. air box
- b. funnel
- c. mantlepiece
- d. fire box

Road to Revolution DBQ's (Document Based Questions)

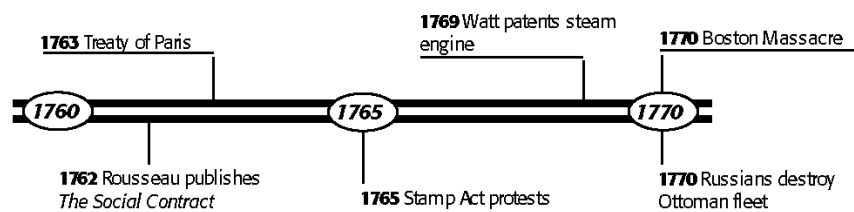
Name _____

Date _____ Class _____

14. According to the chart, in what year was the public debt the highest?

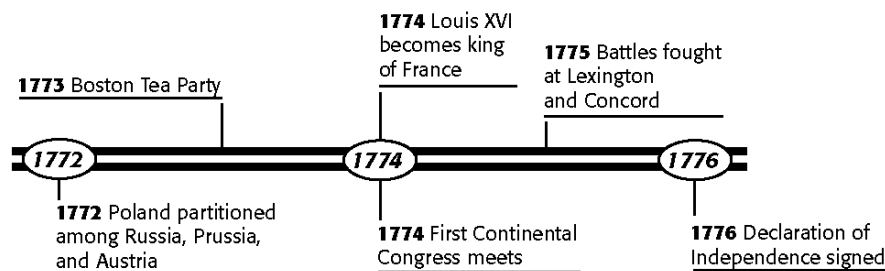
Year	Debt
1836	\$ 37,513.05
1831	39,123,191.68
1826	81,054,059.99
1821	89,987,427.66
1816	127,334,933.74
1811	48,005,587.76
1806	75,723,270.66
1801	83,038,050.80
1796	83,762,172.07
1791	75,463,473.52

- | | |
|---------|---------|
| a. 1791 | c. 1821 |
| b. 1816 | d. 1831 |



15. Based on the time line, what event occurred in the same year that the Russians destroyed the Ottoman fleet?

- | | |
|-----------------------|----------------------|
| a. Treaty of Paris | c. Boston Massacre |
| b. Stamp Act protests | d. none of the above |



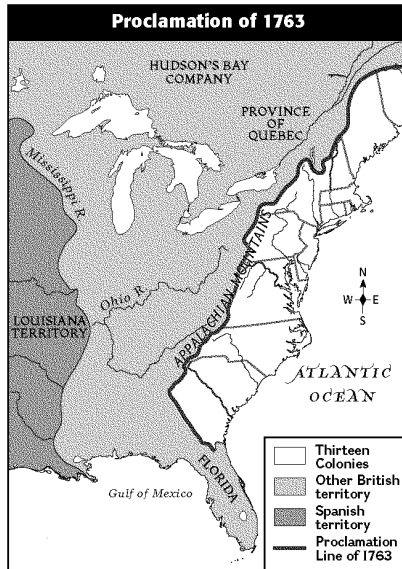
16. Based on the time line, what event occurred in the same year that Louis XVI became the king of France?

- | | |
|-------------------------------------|---------------------------------------|
| a. Boston Tea Party | c. Declaration of Independence signed |
| b. Battles of Lexington and Concord | d. none of the above |

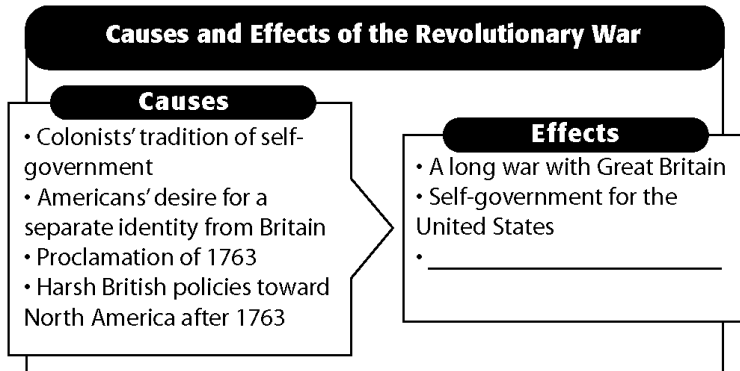
Road to Revolution DBQ's (Document Based Questions)

Name _____

Date _____ Class _____



17. What natural feature marked the eastern boundary of Spanish territory?
- Appalachian Mountains
 - Mississippi River
 - Gulf of Mexico
 - Atlantic Ocean

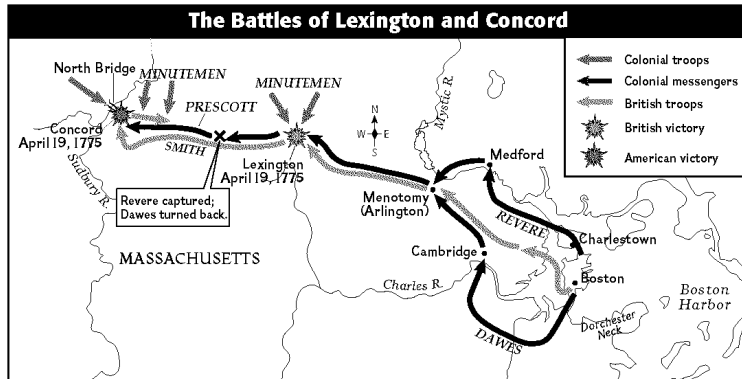


18. Which answer completes the Revolutionary War cause and effect chart above?
- World recognition of United States Independence
 - Treaty of Paris signed
 - Abolitionist movement begins in the United States
 - The Great Awakening

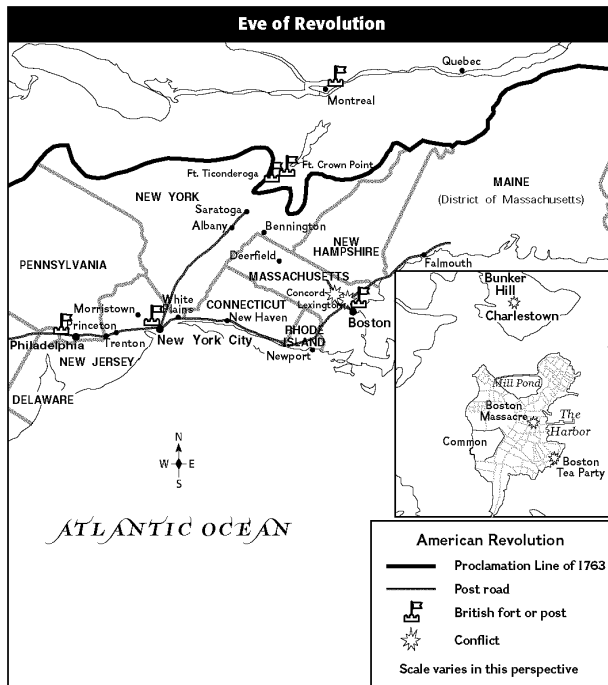
Road to Revolution DBQ's (Document Based Questions)

Name _____

Date _____ Class _____



19. In what state were the battles of Lexington and Concord fought?
- New Hampshire
 - Connecticut
 - Rhode Island
 - Massachusetts
20. The battles of Lexington and Concord were fought ____.
- on the same day
 - at the same exact location
 - both A & B
 - neither A nor B



21. Based on the map, what was the northernmost location of a British fort or post?
- St. Augustine
 - New York City
 - Montreal
 - Fort Ticonderoga
22. The inset on this map shows a part of what location?
- New York Harbor
 - Rhode Island
 - Boston Harbor
 - Chesapeake Bay